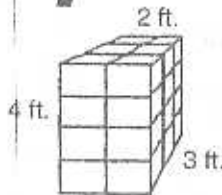
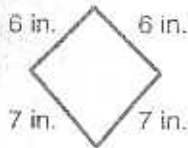
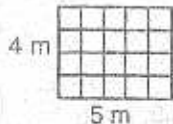


Arithmetic Developed Daily **4**



Name _____

$$40 \times 6 =$$

$$8 \times 30 =$$

$$60 + 80 =$$



+ - \times \div

+ - \times \div



milliliters
liters

Area = _____ Perimeter = _____ Volume = _____ $1 + 2 + 3 + 4 =$

Shantay watched TV for 6 hours on Monday and 3 on Tuesday. If her parents allow her a total of 20 hours per week, how much time does she have left?

Thought

Information

Plan

Solution