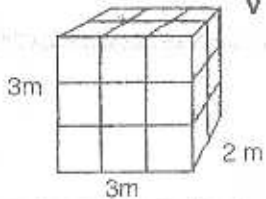
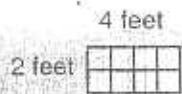
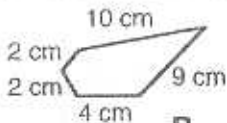


Arithmetic Developed Daily → 4

Name _____



V = _____



P = _____

<, > or =

7 x 3	<input type="text"/>	5 x 4
6 x 4	<input type="text"/>	8 x 3
6 x 6	<input type="text"/>	9 x 4



meters

kilometers

Danielle had 525 gum-balls in her bubble gum machine. She took some to school and had 419 left. How many did she take to school?

Thought _____

Information _____

Plan _____

Solution _____